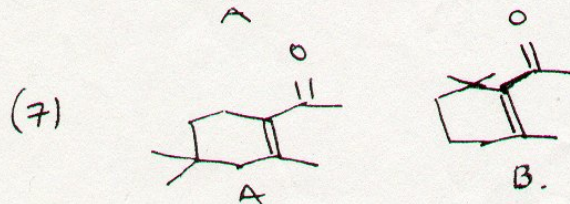
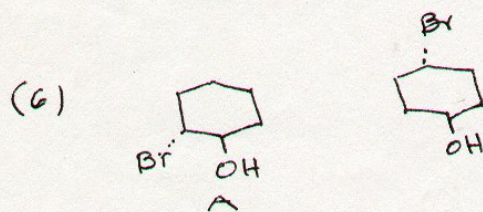
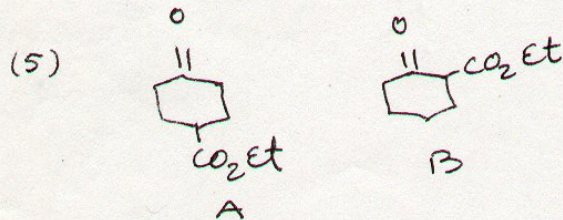
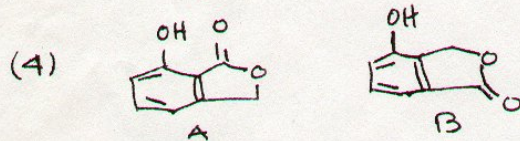
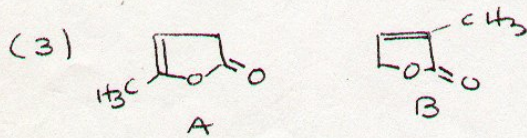
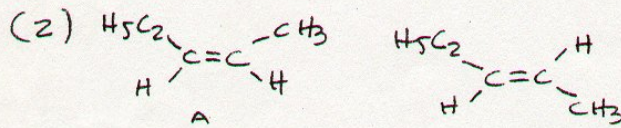
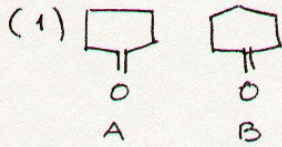


Tarea

How can infrared spectroscopy be used to distinguish between the structures shown in each of the following pairs?



El compuesto A presenta una absorción a  $1686\text{cm}^{-1}$  mientras que el B la presenta a  $1693\text{cm}^{-1}$ .  
¿A que comportamiento estructural atribuyes la diferencia?